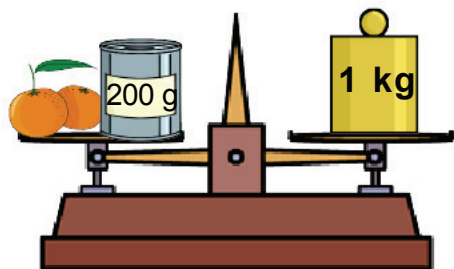



1) Indique le poids de chaque article.



Les oranges pèsent
.....



Un verre de lait pèse
.....

2) Compare ces différentes masses en entourant le bon signe.




1 4 0 0 g

< = >




1 kg 3 5 0 g




3 0 2 0 g

< = >



3 kg 0 2 0 g



1 kg 0 4 6 g

< = >



0 8 5 6 g